


Investigating Lines of Symmetry



Name: _____

Sides: _____


Lines of Symmetry: ____



Name: _____

Sides: _____


Lines of Symmetry: ____



Name: _____

Sides: _____


Lines of Symmetry: ____



Name: _____

Sides: _____


Lines of Symmetry: ____



Name: _____

Sides: _____


Lines of Symmetry: ____



Name: _____

Sides: _____

Lines of Symmetry: ____




Name: _____

Sides: _____

Lines of Symmetry: ____

Investigating Lines of Symmetry



Name: _____

Sides: _____

Lines of Symmetry: ____



Name: _____

Sides: _____


Lines of Symmetry: ____



Name: _____

Sides: _____

Lines of Symmetry: ____



Name: _____

Sides: _____


Lines of Symmetry: ____



Name: _____

Sides: _____


Lines of Symmetry: ____



Name: _____

Sides: _____

Lines of Symmetry: ____

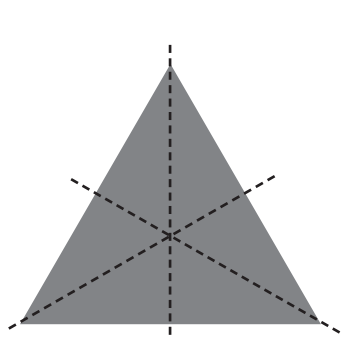


Name: _____

Sides: _____

Lines of Symmetry: ____

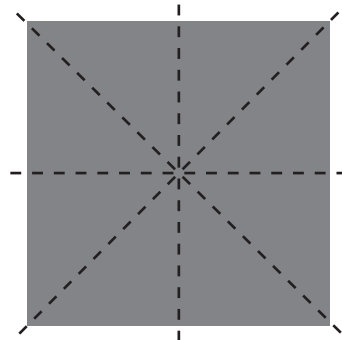
Investigating Lines of Symmetry **Answers**



Name: **triangle**

Sides: **3**

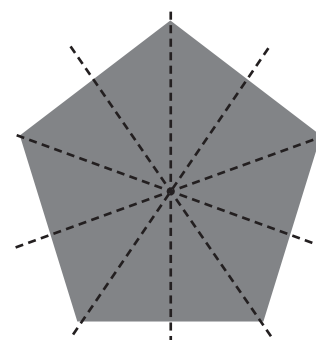
Lines of Symmetry: **3**



Name: **square**

Sides: **4**

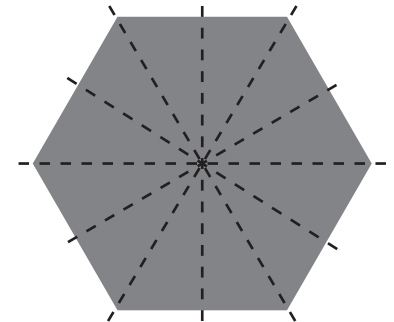
Lines of Symmetry: **4**



Name: **pentagon**

Sides: **5**

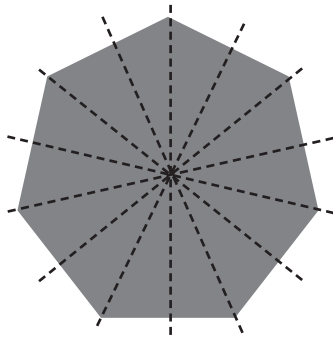
Lines of Symmetry: **5**



Name: **hexagon**

Sides: **6**

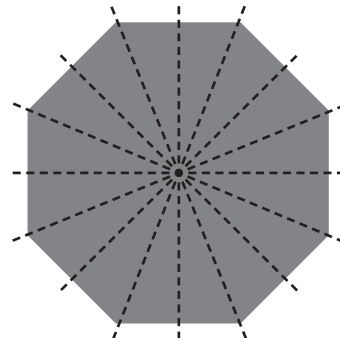
Lines of Symmetry: **6**



Name: **heptagon**

Sides: **7**

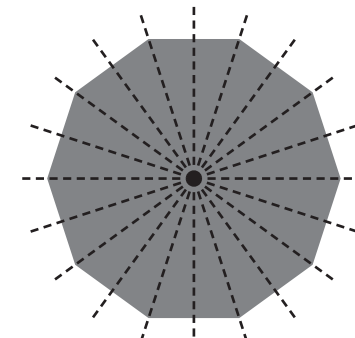
Lines of Symmetry: **7**



Name: **octagon**

Sides: **8**

Lines of Symmetry: **8**

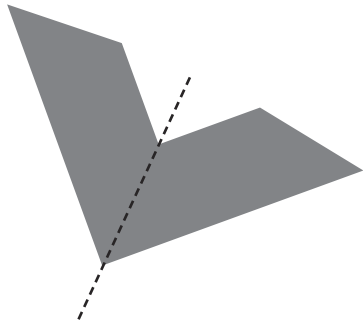


Name: **decagon**

Sides: **10**

Lines of Symmetry: **10**

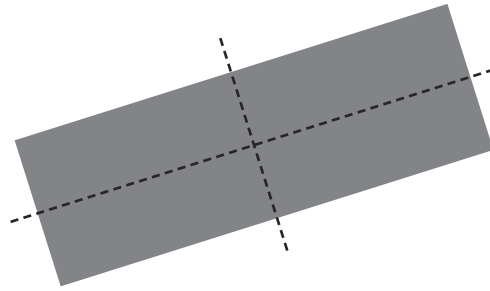
Investigating Lines of Symmetry **Answers**



Name: **irregular hexagon**

Sides: **6**

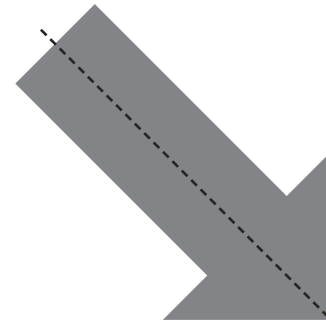
Lines of Symmetry: **1**



Name: **rectangle**

Sides: **4**

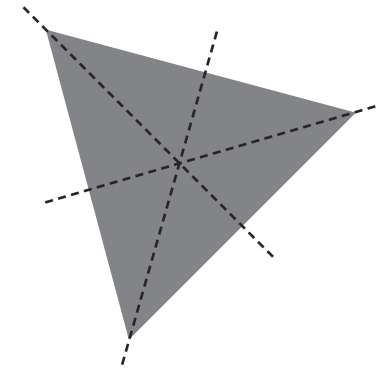
Lines of Symmetry: **2**



Name: **irregular heptagon**

Sides: **7**


Lines of Symmetry: **1**



Name: **equilateral triangle**

Sides: **3**

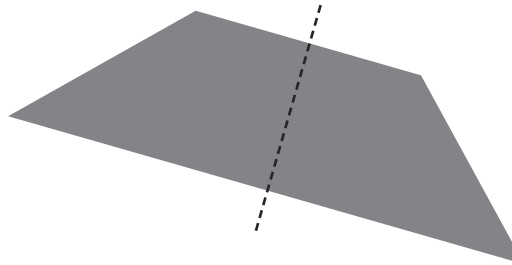
Lines of Symmetry: **3**



Name: **parallelogram**

Sides: **4**

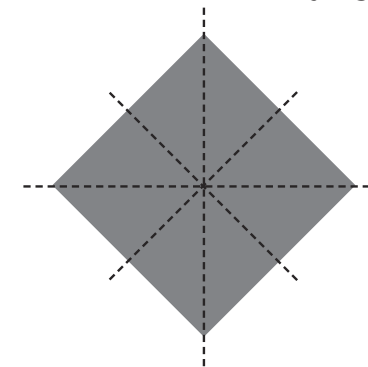
Lines of Symmetry: **0**



Name: **trapezium**

Sides: **4**

Lines of Symmetry: **1**



Name: **square**

Sides: **4**

Lines of Symmetry: **4**